

MR. E. MIKE'S

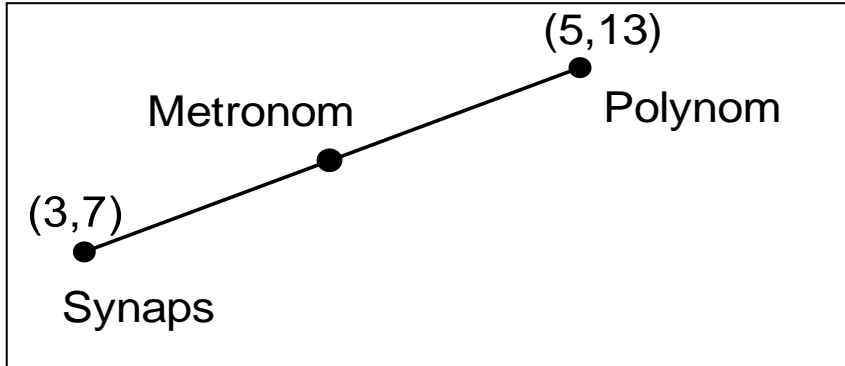
Absurd Math

issue 1:

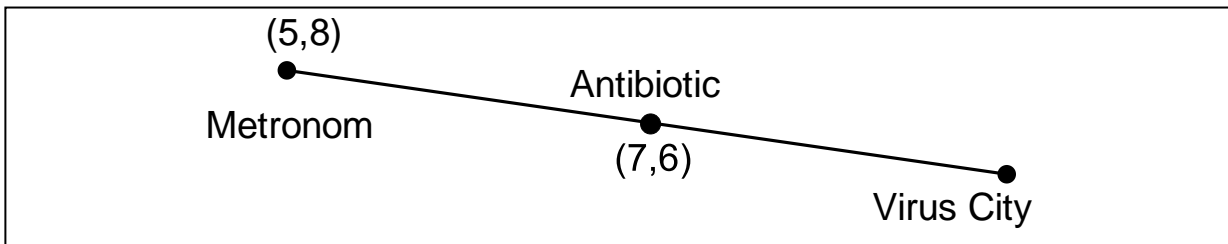
NAME

Adventures of the Illuminants

Dragon Lily is flying from Synaps to Metronom. Find the distance between these two cities.



To protect Metronom from an attack from the germs of Virus City she will fly to Virus City and spray it with medicine. How far is it from Metronom to Virus city?



Lumbernug, the Ogre has gone shopping at the local village. It was late at night so he had to pay on account. On account he doesn't have any money. Solve this equation and determine what is inside the bag. $6x + 8 = 5x + 16$


if $x > 5$ then the bag has cows in it.

if $x < 5$ then the bag has pigs and chickens in it.

$x =$ _____



MONSTER BUGS AND MATH



$$7x - 4 = 2x - 10$$

Complete the pattern for the next 3 numbers.

4, 8, 16, 32, 64, 128, _____, _____, _____

